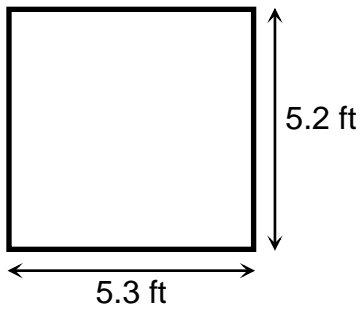




# Answer Key


Find the perimeter.



$$\text{perimeter} = 2 \times 5.3 \text{ ft} + 2 \times 5.2 \text{ ft}$$

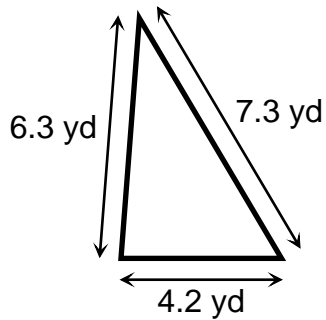
$$\text{perimeter} = 10.6 \text{ ft} + 10.4 \text{ ft}$$

$$\text{perimeter} = 21 \text{ ft}$$



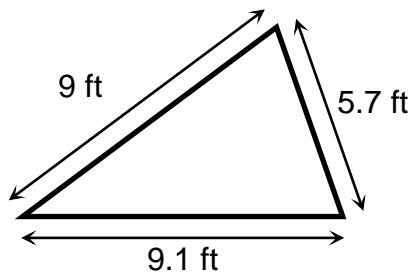
$$\text{perimeter} = 4 \times 4.7 \text{ in}$$

$$\text{perimeter} = 18.8 \text{ in}$$



$$\text{perimeter} = 4.2 \text{ yd} + 7.3 \text{ yd} + 6.3 \text{ yd}$$

$$\text{perimeter} = 17.8 \text{ yd}$$



$$\text{perimeter} = 9.1 \text{ ft} + 5.7 \text{ ft} + 9 \text{ ft}$$

$$\text{perimeter} = 23.8 \text{ ft}$$