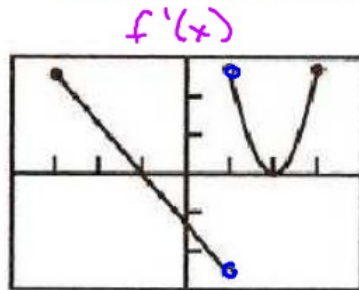


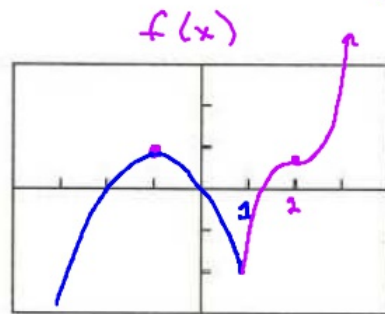
Jump f' is undefined at $x = -1$ (cusp/corner)

$(-3, +1)$
 f' is linear
 f is quadratic

8. Sketch a possible graph of a continuous function f that has domain $[-3, 3]$, where $f(-1) = 1$ and the graph of $y = f'(x)$ is shown below.



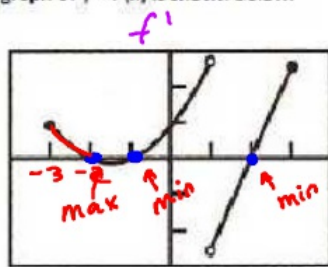
$[-4, 4]$ by $[-3, 3]$



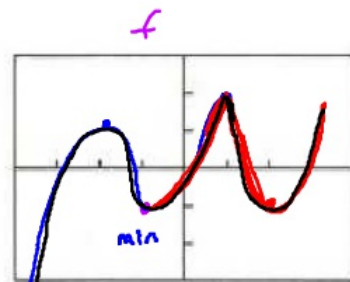
$[-4, 4]$ by $[-3, 3]$

$(-3, -1)$ $f' > 0$ (above) $\rightarrow f$ increasing
 $(-1, 1)$ $f' < 0$ (below) $\rightarrow f$ decreasing
 $(1, 2)$ $f' > 0$ (above) $\rightarrow f$ inc
 $x = 2$ $f' = 0$ (Horizontal Tan) $\rightarrow f$ flat spot
 $(2, 3)$ $f' > 0$ (above) $\rightarrow f$ inc

9. Sketch a possible graph of a continuous function f that has domain $[-3, 3]$, where $f(-1) = -1$ and the graph of $y = f'(x)$ is shown below.



$[-4, 4]$ by $[-3, 3]$



$[-4, 4]$ by $[-3, 3]$

x-int on f'
max/min on f

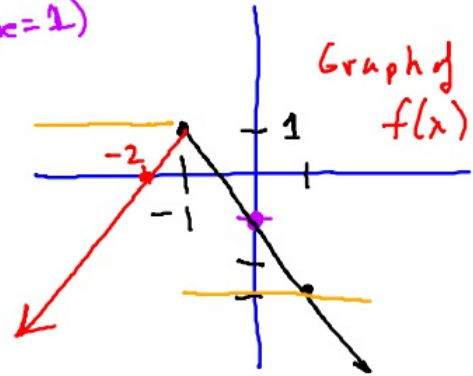
$(-3, -2)$ $f' > 0$ f inc
 $(-2, -1)$ $f' < 0$ f dec
 $(-1, 1)$ $f' > 0$ f inc
 $x = 1$ f' und f cusp
 $(1, 2)$ $f' < 0$ f dec
 $(2, 3)$ $f' > 0$ f inc

p. 107 #27 Sketch the graph of a continuous function f with $f(0) = -1$ and

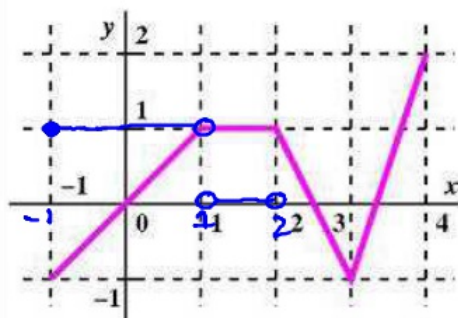
$$f'(x) = \begin{cases} 1, & x < -1 \\ -2, & x > -1 \end{cases} \begin{matrix} \rightarrow \text{Left} \\ \rightarrow \text{Right} \end{matrix}$$

$(0, -1)$

Right \leftarrow
 $(-\infty, -1) f' = 1$ (slope = 1)
 $(-1, \infty) f' = -2$



The graph of the function $f(x)$ is shown here is made of line segments joined at each end.



Graph f'

$(-1, 1) f' > 0$
 $f' = 1$
 $(1, 2) f' = 0$
 $(2, 3) f' = -2$
 $(3, 4) f' = 3$

a. Graph the functions derivative.

b. At what values of x between $x = -1$ and $x = 4$ is the function not differentiable?

corners on f $\rightarrow x = 1, 2, 3$
 jumps on f'