

Math 2

Graphing Quadratics

Name \_\_\_\_\_

Date \_\_\_\_\_ Per \_\_\_\_\_

Convert each equation to vertex form and then graph the equation.

1.  $y = x^2 - 2x - 3$

Vertex Form \_\_\_\_\_

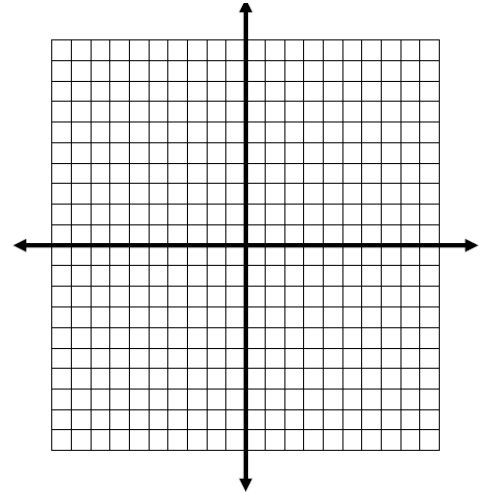
Maximum or Minimum

Vertex \_\_\_\_\_ y – intercept \_\_\_\_\_

AOS \_\_\_\_\_ Domain \_\_\_\_\_

x – intercepts \_\_\_\_\_ Range \_\_\_\_\_

Intervals of Increasing \_\_\_\_\_ Intervals of Decreasing \_\_\_\_\_



2.  $y = x^2 + 4x - 12$

Vertex Form \_\_\_\_\_

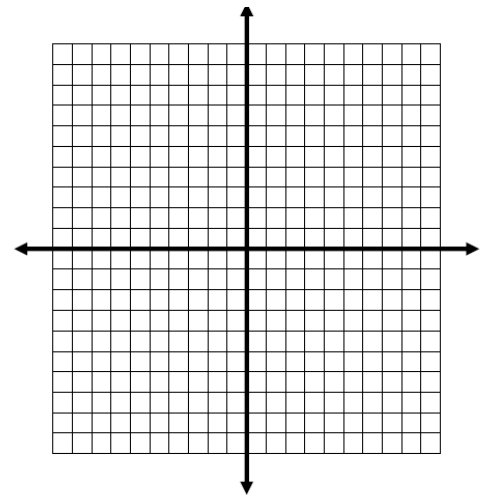
Maximum or Minimum

Vertex \_\_\_\_\_ y – intercept \_\_\_\_\_

AOS \_\_\_\_\_ Domain \_\_\_\_\_

x – intercepts \_\_\_\_\_ Range \_\_\_\_\_

Intervals of Increasing \_\_\_\_\_ Intervals of Decreasing \_\_\_\_\_



3.  $y = x^2 + 6x + 4$

Vertex Form \_\_\_\_\_

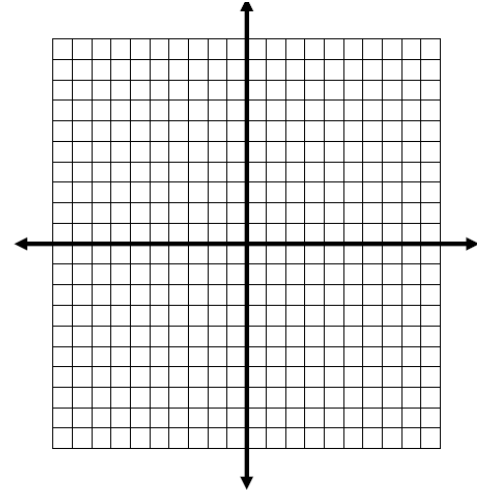
Maximum or Minimum

Vertex \_\_\_\_\_ y – intercept \_\_\_\_\_

AOS \_\_\_\_\_ Domain \_\_\_\_\_

x – intercepts \_\_\_\_\_ Range \_\_\_\_\_

Intervals of Increasing \_\_\_\_\_ Intervals of Decreasing \_\_\_\_\_



4.  $y = x^2 + 4x + 3$

Vertex Form \_\_\_\_\_

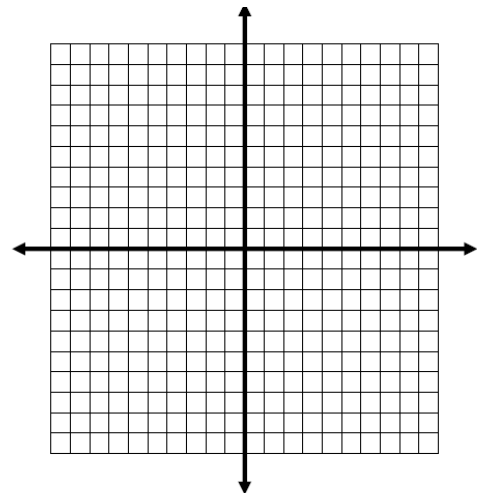
Maximum or Minimum

Vertex \_\_\_\_\_ y – intercept \_\_\_\_\_

AOS \_\_\_\_\_ Domain \_\_\_\_\_

x – intercepts \_\_\_\_\_ Range \_\_\_\_\_

Intervals of Increasing \_\_\_\_\_ Intervals of Decreasing \_\_\_\_\_



5.  $y = x^2 - 6$

Vertex Form \_\_\_\_\_

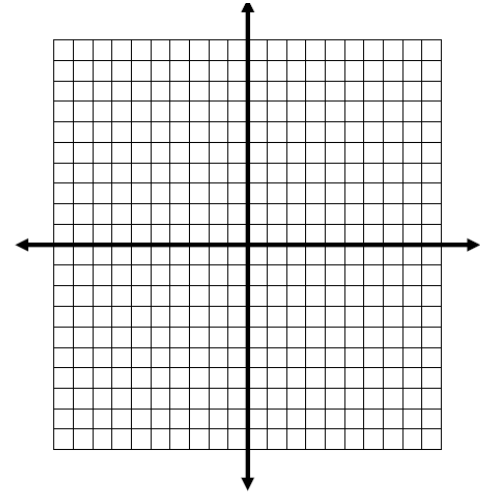
Maximum or Minimum

Vertex \_\_\_\_\_ y – intercept \_\_\_\_\_

AOS \_\_\_\_\_ Domain \_\_\_\_\_

x – intercepts \_\_\_\_\_ Range \_\_\_\_\_

Intervals of Increasing \_\_\_\_\_ Intervals of Decreasing \_\_\_\_\_



6.  $y = x^2 + 2x + 5$

Vertex Form \_\_\_\_\_

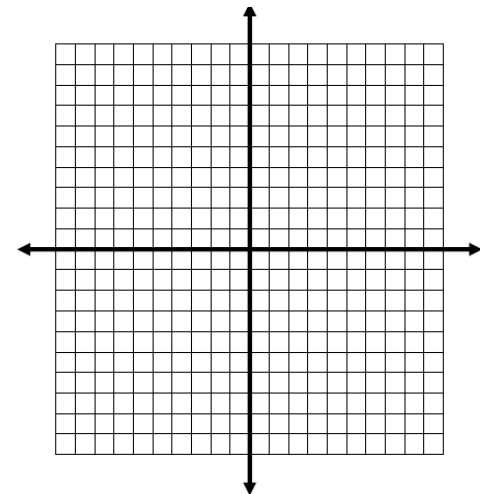
Maximum or Minimum

Vertex \_\_\_\_\_ y – intercept \_\_\_\_\_

AOS \_\_\_\_\_ Domain \_\_\_\_\_

x – intercepts \_\_\_\_\_ Range \_\_\_\_\_

Intervals of Increasing \_\_\_\_\_ Intervals of Decreasing \_\_\_\_\_



7.  $y = x^2 + 5x$

Vertex Form \_\_\_\_\_

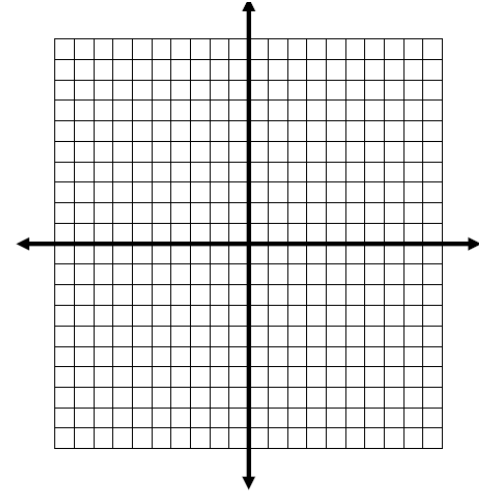
Maximum or Minimum

Vertex \_\_\_\_\_ y – intercept \_\_\_\_\_

AOS \_\_\_\_\_ Domain \_\_\_\_\_

x – intercepts \_\_\_\_\_ Range \_\_\_\_\_

Intervals of Increasing \_\_\_\_\_ Intervals of Decreasing \_\_\_\_\_



8.  $y = x^2 + 6x + 1$

Vertex Form \_\_\_\_\_

Maximum or Minimum

Vertex \_\_\_\_\_ y – intercept \_\_\_\_\_

AOS \_\_\_\_\_ Domain \_\_\_\_\_

x – intercepts \_\_\_\_\_ Range \_\_\_\_\_

Intervals of Increasing \_\_\_\_\_ Intervals of Decreasing \_\_\_\_\_

